

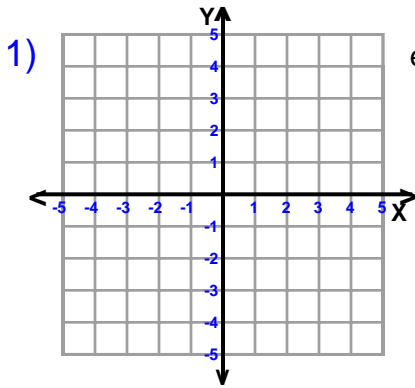
Name : \_\_\_\_\_

Score : \_\_\_\_\_

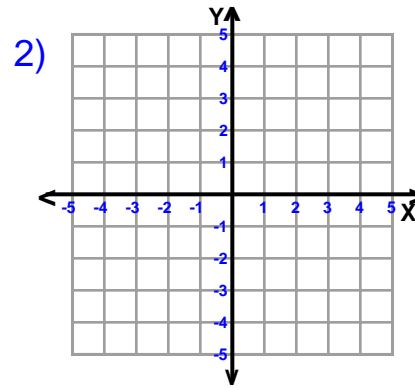
Teacher : \_\_\_\_\_

Date : \_\_\_\_\_

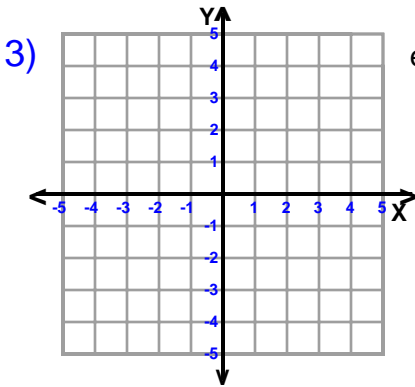
### Sketch Each Line



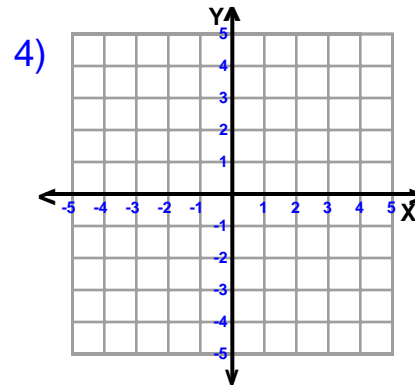
equation  $y = \frac{7}{4}x - 3$



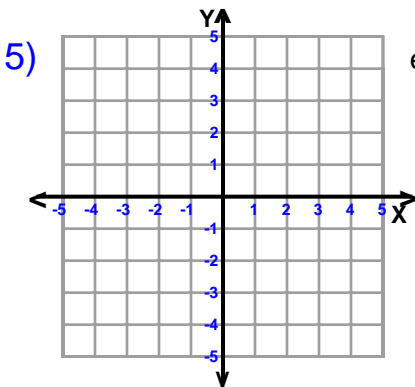
equation  $y = \frac{1}{5}x - 2$



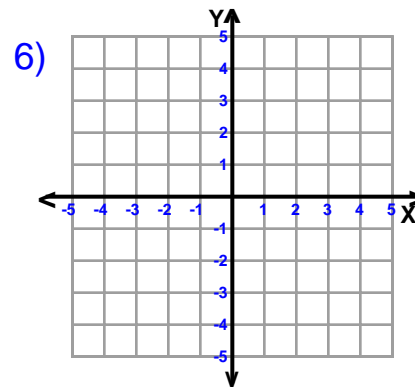
equation  $y = -x + 4$



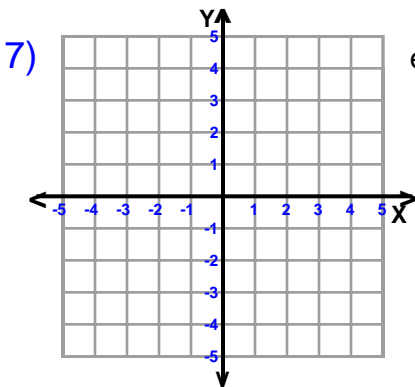
equation  $y = \frac{1}{2}x - 1$



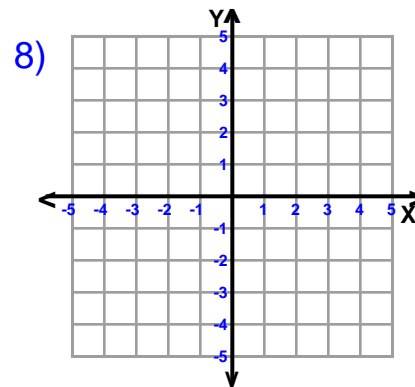
equation  $y = -\frac{7}{6}x + 2$



equation  $y = -6x - 3$



equation  $y = \frac{1}{4}x - 2$



equation  $y = -5x - 3$



Name : \_\_\_\_\_

Score : \_\_\_\_\_

Teacher : \_\_\_\_\_

Date : \_\_\_\_\_

### Sketch Each Line

