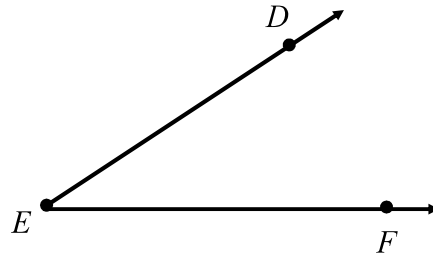




# More Constructions Practice!

Create each construction using your compass and straightedge.

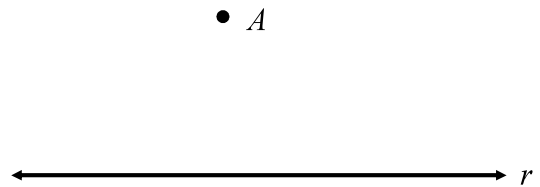
1. Construct the bisector of  $\angle DEF$ .



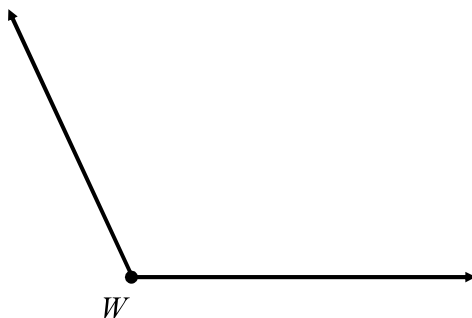
2. Construct a line perpendicular to line  $m$ , through point  $S$ .



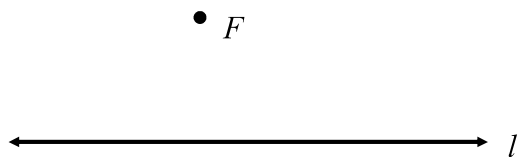
3. Construct a line parallel to line  $r$ , through point  $A$ .




4. Construct an angle congruent to  $\angle W$ .



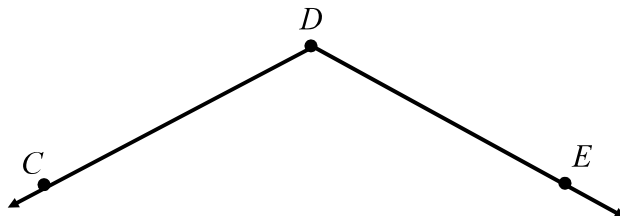
5. Construct a line perpendicular to line  $l$ , through point  $F$ .



6. Construct the perpendicular bisector of  $\overline{PQ}$ .



7. Construct the bisector of  $\angle CDE$ .



8. Construct a line parallel to line  $p$ , through point  $M$ .

