
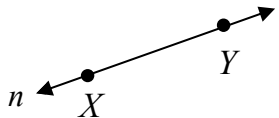
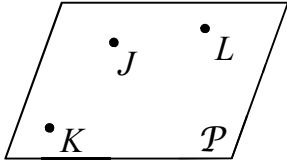
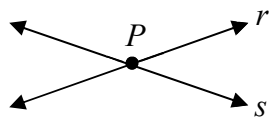
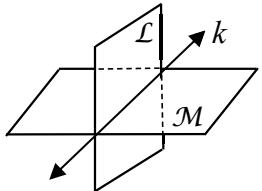


Name: _____

Date: _____

Topic: _____

Class: _____

Main Ideas/Questions	Notes
<p>POINT</p> 	<ul style="list-style-type: none"> A point is a _____. It has no _____ or _____. Always use a <u>CAPITAL LETTER</u> to name a point. <p>Example: _____</p>
<p>LINE</p> 	<ul style="list-style-type: none"> A line is made up of _____. Any _____ points form a line. A line has no _____ or _____. Name a line by any <u>two</u> points on the line, or a lowercase script letter. <p>Example: _____</p> <ul style="list-style-type: none"> COLLINEAR POINTS: Points that lie on the same line. NON-COLLINEAR POINTS: Points that do NOT lie on the same line. (Must be at least three points!)
<p>PLANE</p> 	<ul style="list-style-type: none"> A plane is a _____ made up of points. Any _____ points make up a plane. A plane extends indefinitely in all directions. Name a plane by any <u>three</u> non-collinear points on the plane, or an uppercase script letter. <p>Example: _____</p> <ul style="list-style-type: none"> COPLANAR POINTS: Points that line on the same plane. NON-COPLANAR POINTS: Points that do NOT lie on the same plane. (Must be at least four points!)
<p>Intersecting LINES & PLANES</p>	 <p>Two lines intersect at a _____!</p>  <p>Two planes intersect at a _____!</p>