

**Unit 2 Test - REVIEW***Solve each equation.*

**1**  $6m + 2m = 16$

**2**  $-2.3y - 6.4y = -174$

**3**  $6c + 3c = 4c - 35$

**4**  $10d - 4d + 17 = -2d - 7$

**5**  $7(3n - 4) - 16n = 2$

**6**  $15 - 4(x + 3) = -5$

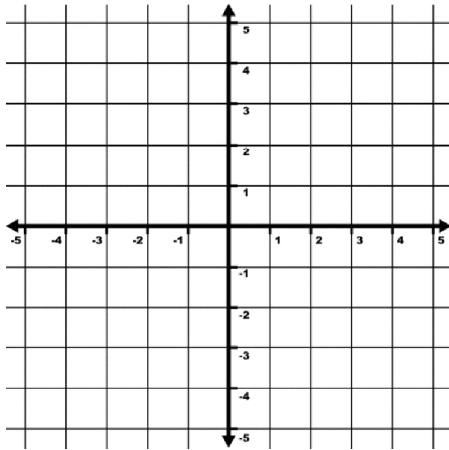
**7**  $7b - 2 + b = 4(2b - 4)$

**8**  $17a + 4(a - 6) = 3$

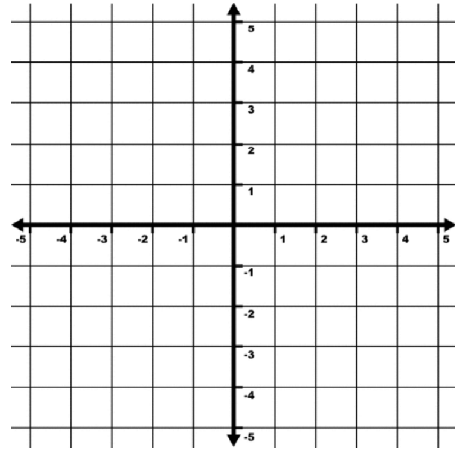
9  $3(3f - 4) = 7f - 12 + 2f$

10  $6g + 3 + 2g = 7 + 5g + 5$

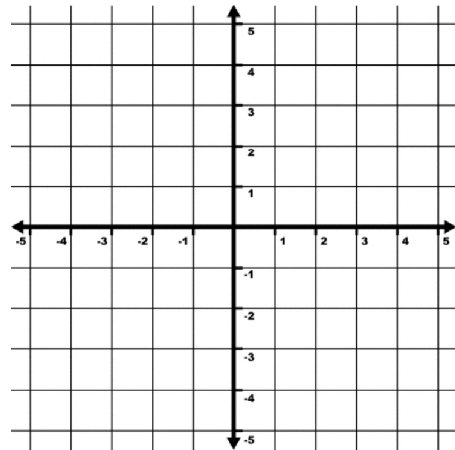
11 Graph  $y = -\frac{1}{2}x - 2$



12 Graph  $y = 2x - 1$

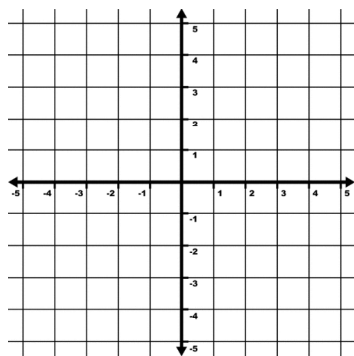


13 Graph  $y = -\frac{3}{2}x + 4$

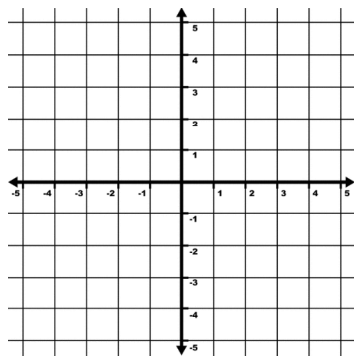


**Unit 2 Test - REVIEW**  
**Answer Section**

- 1 2
- 2 20
- 3 -7
- 4 -3
- 5 6
- 6 2
- 7 No Solution
- 8  $\frac{9}{7}$
- 9 IMS
- 10 3
- 11



12



13

