

Name : _____

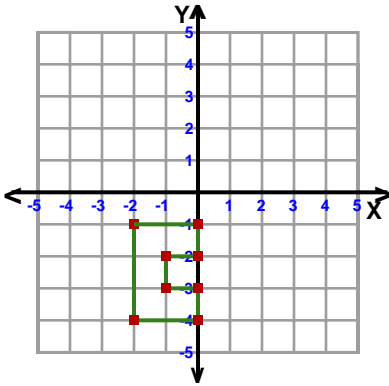
Score : _____

Teacher : _____

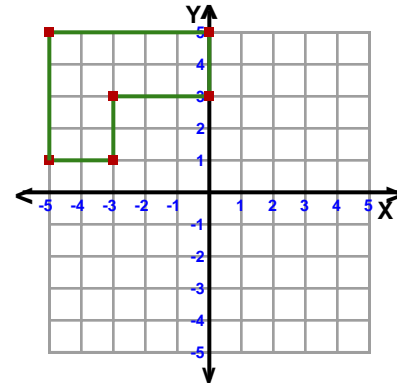
Date : _____

Reflections

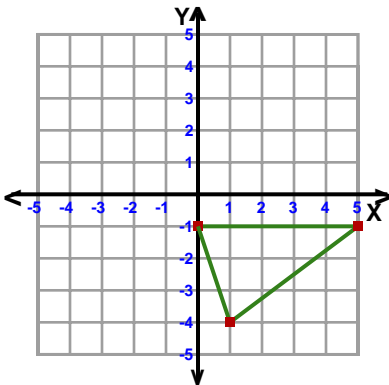
- 1) Reflection: Across the y-axis



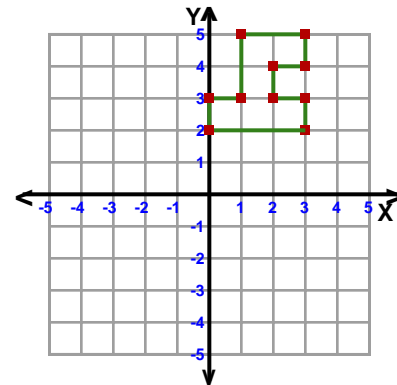
- 2) Reflection: Across the line $x = -1$



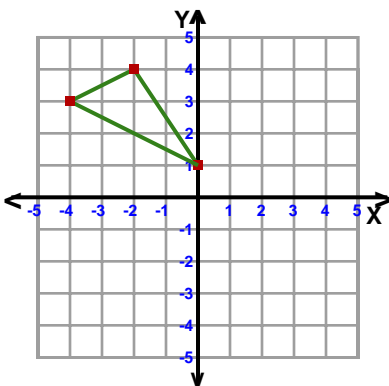
- 3) Reflection: Across the line $y = -2$



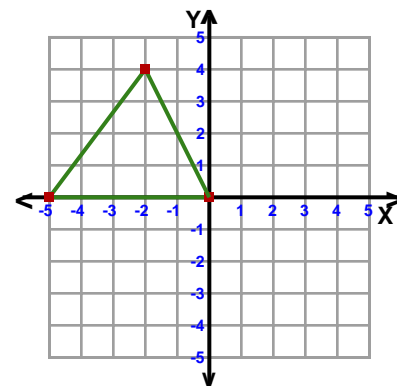
- 4) Reflection: Across the x-axis



- 5) Reflection: Across Line $y = -x$



- 6) Reflection: Across Line $y = x$



Name : _____

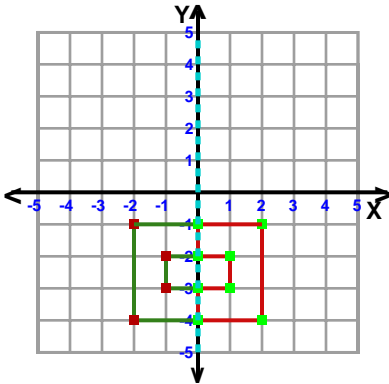
Score : _____

Teacher : _____

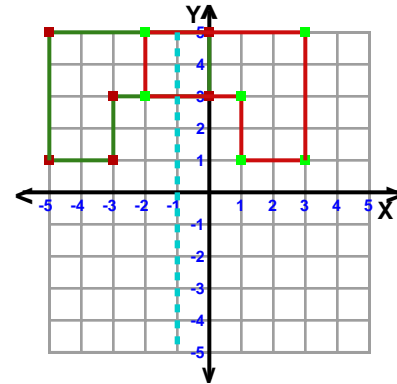
Date : _____

Reflections

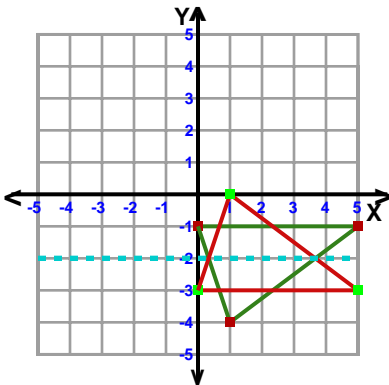
1) Reflection: Across the y-axis



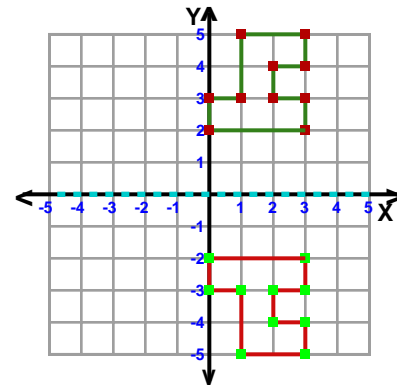
2) Reflection: Across the line $x = -1$



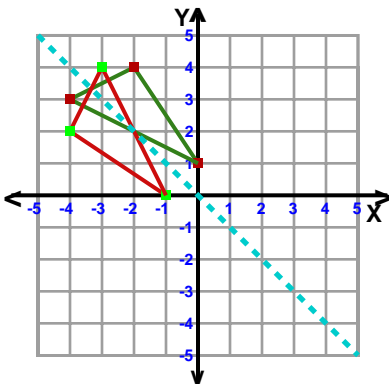
3) Reflection: Across the line $y = -2$



4) Reflection: Across the x-axis



5) Reflection: Across Line $y = -x$



6) Reflection: Across Line $y = x$

