

Name : _____

Score : _____

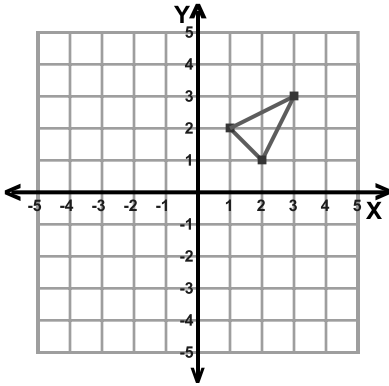
Teacher : _____

Date : _____

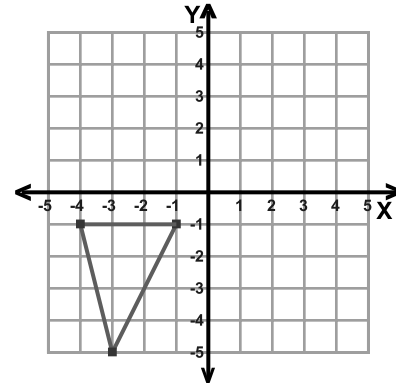
Transformations

ccw = counterclockwise

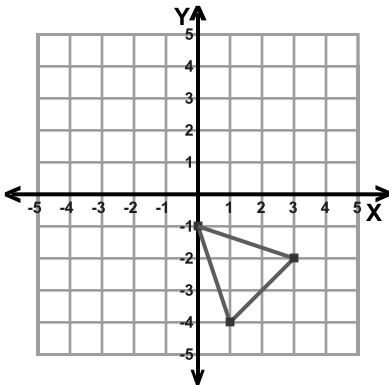
1) Translation: 4 left and 2 down



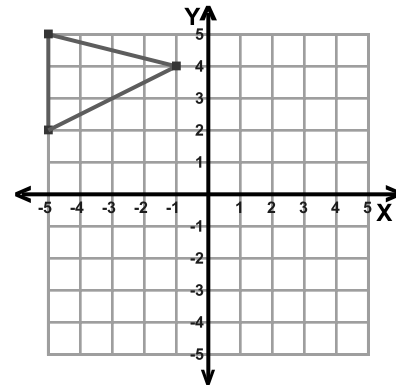
2) Reflection: Across the line $x = -1$



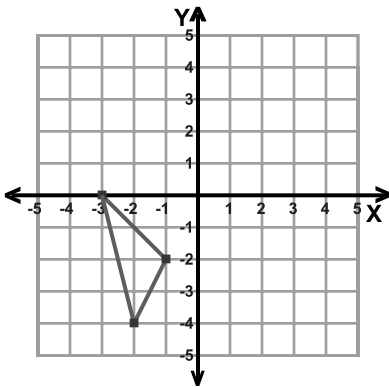
3) Reflection: Across Line $y = x$



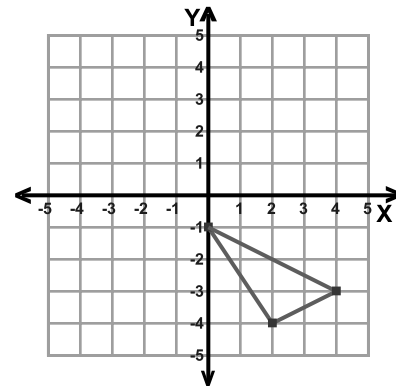
4) Rotation: 90° clockwise about the origin



5) Translation: 4 right and 4 up



6) Rotation: 90° clockwise about the origin



Name : _____

Score : _____

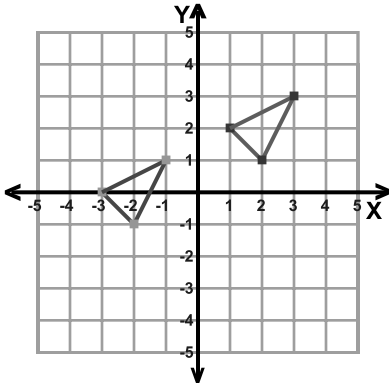
Teacher : _____

Date : _____

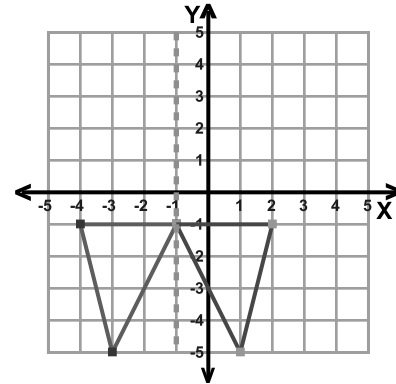
Transformations

ccw = counterclockwise

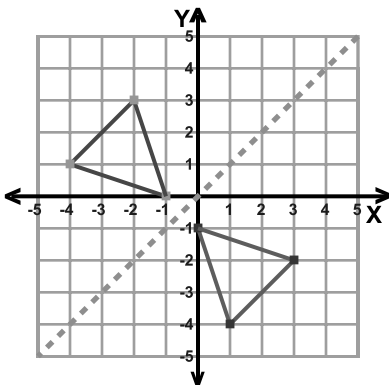
1) Translation: 4 left and 2 down



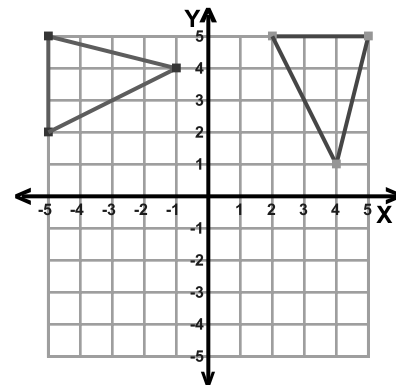
2) Reflection: Across the line $x = -1$



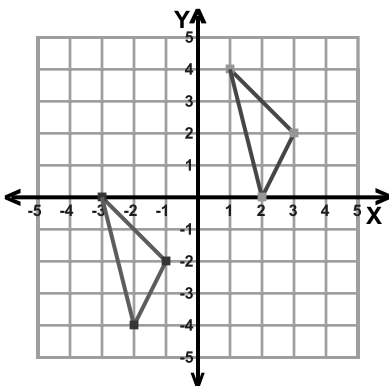
3) Reflection: Across Line $y = x$



4) Rotation: 90° clockwise about the origin



5) Translation: 4 right and 4 up



6) Rotation: 90° clockwise about the origin

