
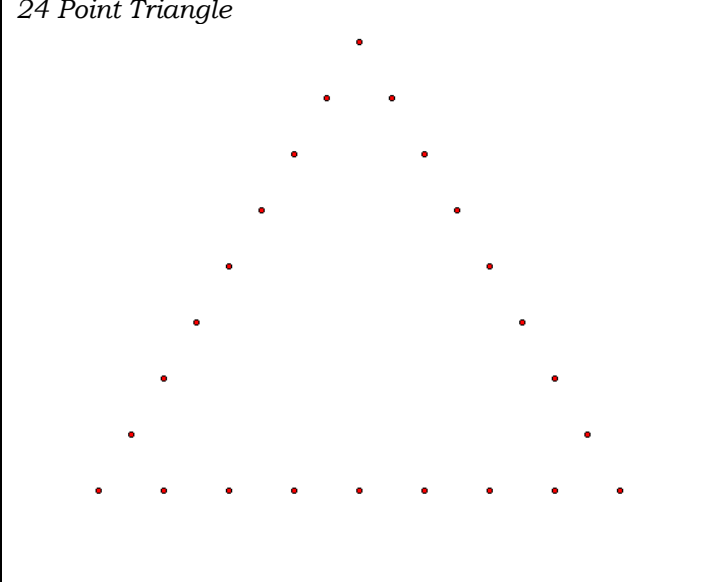
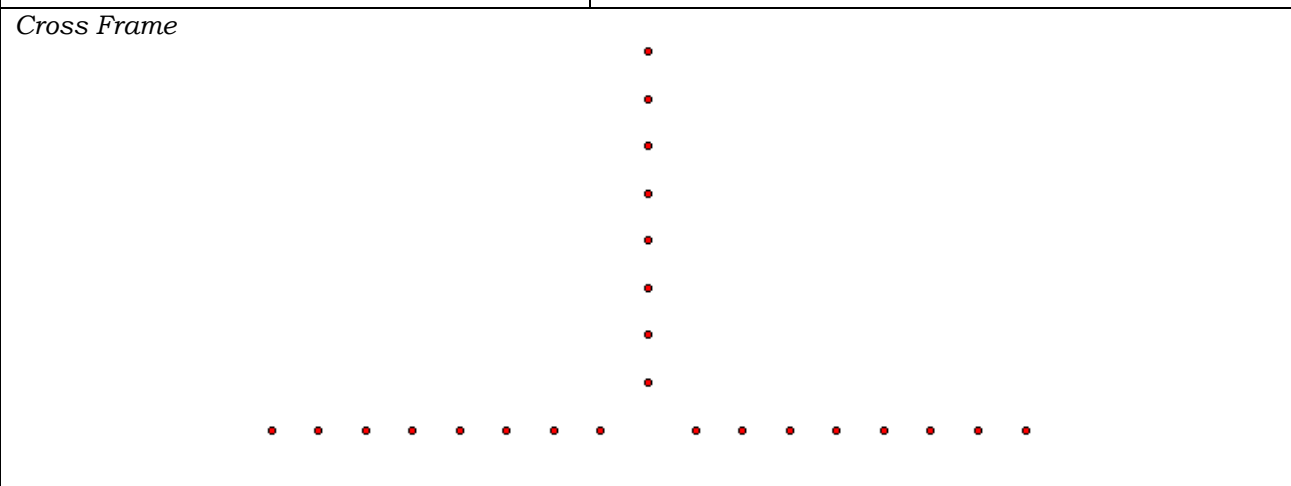


Name: _____

Introduction to the Beauty of Numbers

<p><i>16 Point Circle</i></p> 	<p><i>24 Point Triangle</i></p> 																																																																																								
<p>Equation: $y = x + 6$</p> <table border="1" style="width: 100%; border-collapse: collapse; text-align: center;"> <tr><td>x</td><td>1</td><td>2</td><td>3</td><td>4</td><td>5</td><td>6</td><td>7</td><td>8</td></tr> <tr><td>y</td><td></td><td></td><td></td><td></td><td></td><td></td><td></td><td></td></tr> </table> <table border="1" style="width: 100%; border-collapse: collapse; text-align: center;"> <tr><td>x</td><td>9</td><td>10</td><td>11</td><td>12</td><td>13</td><td>14</td><td>15</td><td>16</td></tr> <tr><td>y</td><td></td><td></td><td></td><td></td><td></td><td></td><td></td><td></td></tr> </table>	x	1	2	3	4	5	6	7	8	y									x	9	10	11	12	13	14	15	16	y									<p>Equation: $y = x + 11$</p> <table border="1" style="width: 100%; border-collapse: collapse; text-align: center;"> <tr><td>x</td><td>1</td><td>2</td><td>3</td><td>4</td><td>5</td><td>6</td><td>7</td><td>8</td><td>9</td><td>10</td><td>11</td><td>12</td><td>13</td></tr> <tr><td>y</td><td></td><td></td><td></td><td></td><td></td><td></td><td></td><td></td><td></td><td></td><td></td><td></td><td></td></tr> </table> <table border="1" style="width: 100%; border-collapse: collapse; text-align: center;"> <tr><td>x</td><td>14</td><td>15</td><td>16</td><td>17</td><td>18</td><td>19</td><td>20</td><td>21</td><td>22</td><td>23</td><td>24</td></tr> <tr><td>y</td><td></td><td></td><td></td><td></td><td></td><td></td><td></td><td></td><td></td><td></td><td></td></tr> </table>	x	1	2	3	4	5	6	7	8	9	10	11	12	13	y														x	14	15	16	17	18	19	20	21	22	23	24	y											
x	1	2	3	4	5	6	7	8																																																																																	
y																																																																																									
x	9	10	11	12	13	14	15	16																																																																																	
y																																																																																									
x	1	2	3	4	5	6	7	8	9	10	11	12	13																																																																												
y																																																																																									
x	14	15	16	17	18	19	20	21	22	23	24																																																																														
y																																																																																									
<p><i>Cross Frame</i></p> 																																																																																									
<p>Equation: $y = x + 8$</p> <table border="1" style="width: 100%; border-collapse: collapse; text-align: center;"> <tr><td>x</td><td>1</td><td>2</td><td>3</td><td>4</td><td>5</td><td>6</td><td>7</td><td>8</td></tr> <tr><td>y</td><td></td><td></td><td></td><td></td><td></td><td></td><td></td><td></td></tr> </table>		x	1	2	3	4	5	6	7	8	y																																																																														
x	1	2	3	4	5	6	7	8																																																																																	
y																																																																																									

Beauty of Numbers Math Project

Due: November 17th

You Need: Four different designs arranged on half of a poster board

Grade: Your project will be graded by neatness, creativity, degree of difficulty, and the inclusion of four different designs.